

Name: \_\_\_\_\_


Date: \_\_\_\_\_

Lesson 04.05: Settling on a Multiplication Model  
Printable Assessment: Settling on a Multiplication Model


# Settling on a Multiplication Model

Use the fraction models to solve the equations.


1.  $0.3 \times 0.4 =$  \_\_\_\_\_



2.  $0.7 \times 0.6 =$  \_\_\_\_\_



3.  $0.8 \times 0.3 =$  \_\_\_\_\_



4.  $0.7 \times 0.7 =$  \_\_\_\_\_

